

# Version 1 Key

## PART 1: MATHS

### 1. Fill in the missing numbers

54	55	56	57
-----			
342	343	344	345

m1.1

65      66      67      68

m1.2

69      70      71      72

m1.3

525      526      527      528

m1.4

529      530      531      532

**1/0**

Give **1** for correct answer and  
**0** for wrong answer

### 2. Add the numbers together

9 + 3 <hr/> 12	32 + 46 <hr/> 78	438 + 241 <hr/> 679
----------------------	------------------------	---------------------------

56 + 43 <hr/> 99	48 + 27 <hr/> 75	357 + 445 <hr/> 802
m2.1	m2.2	m2.3

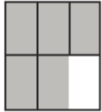
**1/0**

Give **1** for correct answer and  
**0** for wrong answer


3. Circle the fraction that matches the shaded part


 $\frac{1}{2}$ 
 $\frac{1}{3}$ 
 $\frac{3}{4}$


m3.1


 $\frac{5}{6}$ 
 $\frac{1}{5}$ 
 $\frac{6}{5}$

m3.2


 $\frac{5}{8}$ 
 $\frac{3}{8}$ 
 $\frac{5}{6}$

m3.3


 $\frac{1}{5}$ 
 $\frac{5}{1}$ 
 $\frac{1}{4}$

**1/0**

Give **1** for correct answer and **0** for wrong answer

4. Subtract the numbers

$\begin{array}{r} 9 \\ - 3 \\ \hline 6 \end{array}$	$\begin{array}{r} 32 \\ - 19 \\ \hline 13 \end{array}$	$\begin{array}{r} 562 \\ - 245 \\ \hline 317 \end{array}$
---	--	---

$\begin{array}{r} 48 \\ - 35 \\ \hline 13 \end{array}$	$\begin{array}{r} 52 \\ - 27 \\ \hline 25 \end{array}$	$\begin{array}{r} 561 \\ - 265 \\ \hline 296 \end{array}$
<b>m4.1</b>	<b>m4.2</b>	<b>m4.3</b>

**1/0**

Give **1** for correct answer and **0** for wrong answer

5. Multiply the numbers

$$2 \times 3 = \boxed{6}$$
$$6 \times 2 = \boxed{12}$$

**m5.1**  $6 \times 4 = \boxed{24}$


**m5.2**  $7 \times 3 = \boxed{21}$


**m5.3**  $8 \times 5 = \boxed{40}$


**1/0**


Give **1** for correct answer and **0** for wrong answer

6. Select the correct time given in the clock

**m6.1**   6:00  12:15  12:00

**m6.2**   3:00  12:15  12:00

**m6.3**   5:57  11:30  6:11

**m6.3**   1:25  1:05  5:05

**1/0**

Give **1** for correct answer and **0** for wrong answer

## 7. Divide the numbers

$6 \div 3 =$

2

$36 \div 4 =$

9

**m7.1**  $18 \div 3 =$

6

**m7.2**  $35 \div 5 =$

7

**m7.3**  $28 \div 4 =$

7

**1/0**

Give **1** for correct answer and  
**0** for wrong answer

## 8. Solve the word problem

Ali has 80 pens. He gets 30 more pens.  
علی کے پاس 80 قلم ہیں۔ اس کو 30 اور قلم ملتے ہیں۔

How many does he have now?

اب علی کے پاس کتنے قلم ہیں؟

110

Umar has 68 pencils. He gives 28 pencils to his friend.

عمر کے پاس 68 پینسل ہیں۔ وہ 28 پینسل اپنے دوست کو دے دیتا ہے۔

How many pencils does Umar have now?

اب عمر کے پاس کتنی پینسل ہیں؟

40

Amna has 57 mangoes. She gets 13 more.

آمنہ کے پاس 57 آم ہیں۔ اسے 13 آم اور ملتے ہیں۔

How many mangoes does Amna have now?

اب آمنہ کے پاس کتنے آم ہیں؟

70

**1/0**

Give **1** for correct answer and  
**0** for wrong answer

**m8.1**

**m8.2**

## PART 2: ENGLISH

### 1. Complete the alphabet series



e1.1



e1.2



e1.3



e1.4




**1/0**

Give **1** for correct answer and **0** for wrong answer

Accept small alphabets also  
(1 mark)

### 2. Identify the correct spellings of the object given in the picture



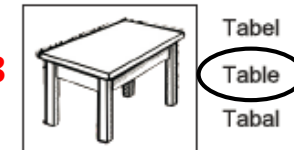
e2.1



e2.2



e2.3



**1/0**

Give **1** for correct answer and **0** for wrong answer

3. Write the word under the picture

	
Dog	Cat

e3.1



Book / Notebook /  
Copy / Register



Flower / plant

e3.2

e3.3



Key / key lock

Don't accept Urdu Answers. Do let me know if you find any answer not given here and you think it is correct

4. Complete the sentence by choosing the correct word

I \_\_\_ eating a banana.

am

are

is

Ali \_\_\_ my brother.

am

are

is

e4.1

We \_\_\_ writing.

is

am

are

e4.2

You \_\_\_ a car.

her

have

has

e4.3

He brushes \_\_\_ teeth.

his

have

are

1/0

Give 1 for correct answer and 0 for wrong answer

Accept answers if written blanks and not circled (1 Mark)

5. Complete the sentence by choosing the correct word

\_\_\_ are eating.  
I                      We                      Us

---

Help me \_\_\_\_  
.                      !                      ?

e5.1

This is a chair. \_\_\_\_\_ is brown in colour.  
It                      He                      She

e5.2

\_\_\_\_\_ is your book?  
Who                      Are                      Where

e5.3

What are you doing \_\_\_\_\_  
.                      ?                      !

1/0

Give 1 for correct answer and 0 for wrong answer

Accept answers if written in blanks (1 Mark)

6. Read the passage and write the answers to the questions

Ahmed is a boy. Ahmed likes sweets.

a) What does Ahmed like?      sweets

e6.1

Sana lives in Lahore. She goes to school daily. Her favourite subject is Math.

a) Where does Sana live?      Lahore

e6.2

b) Which is Sana's favourite subject?      Math / maths

e6.3

c) Where does Sana go?      School

e6.4

Zubair saw a mouse on the road. It was sitting on the grass. A cat jumped on the mouse.

a) Who was sitting on the grass?      Mouse

e6.5

b) Where did Zubair see the mouse?      The Road / Road

e6.6

c) Who jumped on the mouse?      A cat / Cat

1/0

Give 1 for correct answer and 0 for wrong answer

Accept full sentence with answer (1 Mark)

PART 3: URDU

۱. جوڑ کے توڑ بنائیں

باپ    ب    ا    پ  
پھول    پھ    و    ل

ریل ر ی ل    u1.1  
محنت م ح ن ت    u1.2  
مصیبت م ص ی ب ت    u1.3

1/0

Give 1 for correct answer and 0 for wrong answer

Accept ya written in any form. Choti yay, or bari yay, or nuktay wali yay

۲. توڑ کے جوڑ بنائیں

ک ا م    کام  
جھ و ل    جھول


ن م ک    نمک    u2.1  
م ا ل ک    مالک    u2.2  
ک ہ ا ن ی    کہانی    u2.3

1/0

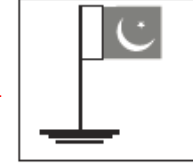
Give 1 for correct answer and 0 for wrong answer



۴. تصویر میں کیا چیز دکھائی گئی ہے



u4.1



پرچم ، جھنڈا ، پاکستان

u4.2



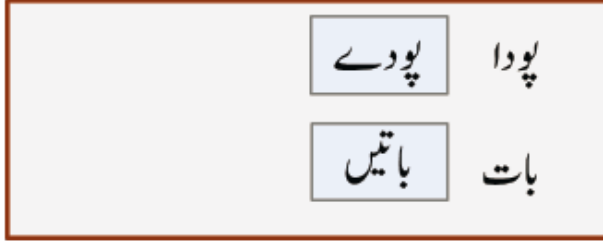
کرسی

u4.3



بلی ، شیر ، چیتا ، جانور

۳. واحد کے جمع لکھیں



u3.1 کمرہ | کمرے ، کمروں

u3.2 محلہ | محلوں ، محلے

u3.3 کتاب | کتابیں ، کتابوں ، کتب

1/0

Give 1 for correct answer and 0 for wrong answer

Accept any of the above answers

Don't accept English Answers. Do let me know if you find any answer not given here and you think it is correct

۶. مناسب الفاظ سے جملے مکمل کریں

علی کھیل رہا _____	تھا	تھی	تھے
علی _____ کتاب ہے	کی	کا	کو

میں تیسری جماعت میں پڑھتا _____	ہوں	ہیں	ہے
احمد بازار جائے _____	گا	گی	گے
فرح کھیل _____ تھی	رہی	رہا	رہے

u6.1

u6.2

u6.3

۵. مذکر کے مونث لکھیں۔

لڑکا	لڑکی
باپ	ماں

چچا	چچی	u5.1
بیل	گائے	u5.2
ماموں	مامی ، مومانی	u5.3

1/0

Give 1 for correct answer and 0 for wrong answer

Accept any of the above answers

1/0

Give 1 for correct answer and 0 for wrong answer

Accept answers if written in blanks

۷. عبارت پڑھ کر سوالات کے جوابات لکھیں

علی کے دو بھائی ہیں۔ علی ملتان میں رہتا ہے۔

علی کہاں رہتا ہے؟

کرن گاؤں میں رہتی ہے۔ وہ اتوار کو اپنے ابو کے ساتھ کھیت کی سیر کرنے جاتی ہے۔ وہ وہاں درخت کے نیچے کھیلتی ہے اور سبزیاں توڑتی ہے۔

کرن اتوار کے دن کہاں جاتی ہے؟

کرن کہاں رہتی ہے؟

کرن کیا توڑتی ہے؟

1/0

Give 1 for correct answer and 0 for wrong answer

Accept full sentence with answers or partial sentences i.e. khait ki sair karne / gaon men / kiran sabzian torti hai etc (1 Mark) .No marks for spelling mistake

ہمارے ملک کا نام پاکستان ہے۔ پاکستان کے چار صوبے ہیں۔  
صوبہ بلوچستان رقبے کے لحاظ سے سب سے بڑا صوبہ ہے۔

ہمارے ملک کا کیا نام ہے؟

رقبے کے لحاظ سے سب سے بڑا صوبہ کون سا ہے؟

پاکستان کے کتنے صوبے ہیں؟

u7.4

u7.5

u7.6

1/0

Give 1 for correct answer and 0 for wrong answer

Accept full sentence with answers or partial sentences i.e. suba Balochistan / chaar sube etc (1 Mark)

No marks for spelling mistake